



YEAR 8 – ICT REVISION WORKSHEET

Q1.State True or False:

- 1. HTML stands for Hyper Term Markup Language.
- 2. Cell Padding indicates the space between the table’s cells.....
- 3. Three views in Dreamweaver are design view, split view and code view.
.....
- 4. HTTP stands for Hyper Text Transfer Protocol.
- 5. The sites which are used to post online diaries are called Wiki.
.....

Q2.Answer the following questions:

1. Write five Advantages of commercial package over HTML.

- (i).....
- (ii).....
- (iii).....
- (iv).....
- (v).....

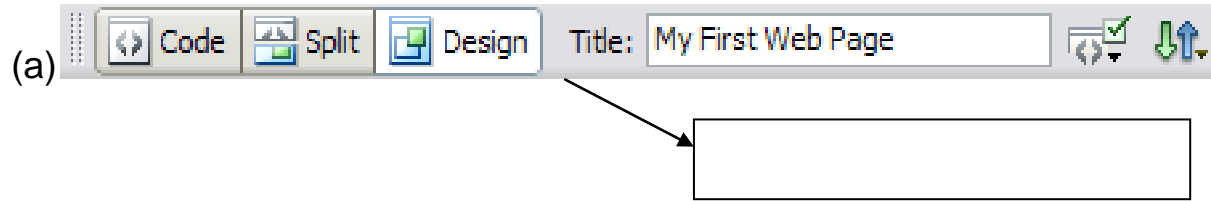
2. What is a website?

.....

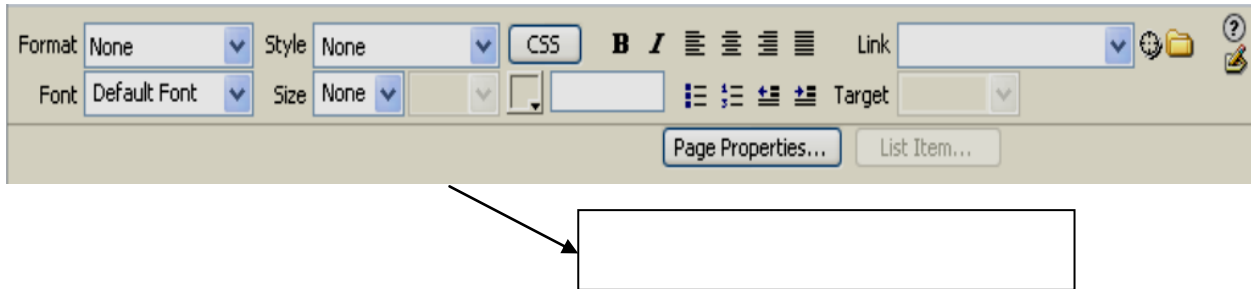
.....

.....

3. Identify the parts of Dreamweaver window shown below.



(b)



4. Write the use of following components of Dreamweaver window.


component	Use
Site panel	
Insert bar	

5. Ordered and Unordered list are the types of list available in Dreamweaver.

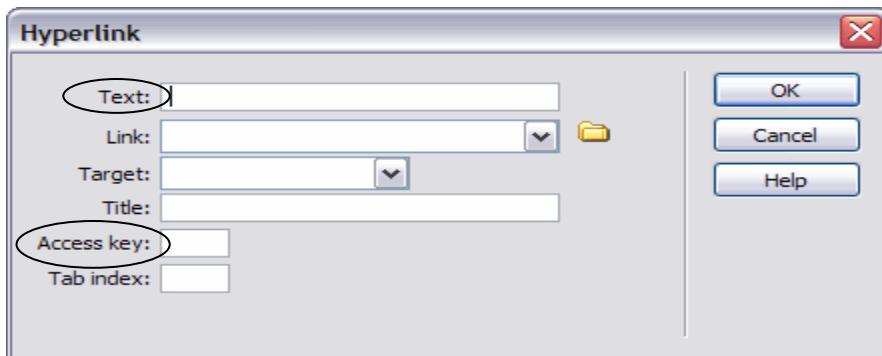
(a)  button is used to create list

(b)  button is used to create..... list

(c) Show an example of ordered list



6. The following dialog box is used to create a hyperlink on a web page.



(a) Define hyperlink.

.....

.....

(b) Write the purpose of the circled fields in the hyperlink dialog box.

Purpose of Text field:

.....
.....

Purpose of Access key field:

.....
.....

7. Social networking sites and blogs are the types of websites.

(a) Mention two other types of websites.

(i).....

(ii).....

(b) Explain the use of blogs.

.....
.....
.....
.....

(c) Give three examples of Social Networking Sites.

(i).....

(ii).....

(iii).....

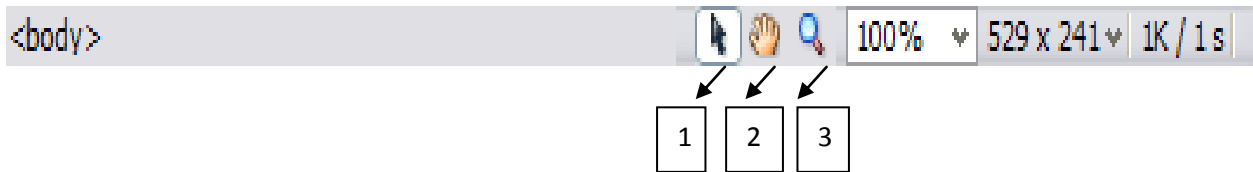
8. Describe three health and safety issues on using computer for prolonged period of time. For each issue explain the cause and solution.

Health Issue	Cause	Solution
Safety Issue	Cause	Solution

9. List the important rules to follow when writing text for a website.

- (i).....
- (ii).....
- (iii).....
- (iv).....
- (v).....

10. Identify the part of Dreamweaver window shown below.



(a) Name of the component:

.....


(b)Mention the names of the labeled icons on the image.

- (1).....
- (2).....
- (3).....

11. Mention two uses of tables on creating web pages.

- (i).....
.....
- (ii).....
.....

12. Design a simple layout sketch of a web page for the DElect website to advertise the special offer of smartphones in January. The page should include appropriate information to exhibit the special offer.

A large, empty rectangular box with a thin black border, intended for a student to draw a layout sketch of a web page. The box occupies most of the page's vertical space below the question text.